


Multiplying and dividing by 7

- 1** a) How many cars are parked in the car park?



$$\square \times \square = \square$$

There are cars.

- b) How many cubes are there in total?



$$\square \times \square = \square$$

There are cubes.

- c) There are 7 biscuits in a packet.

Circle 49 biscuits.



2 Complete the number track.



3 Draw lines to match up the correct number of days to the correct number of weeks.

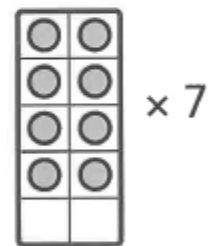


4 a) 7 ten frames each have 8 counters on them.

How many counters are there in total?

$$\square \times \square = \square$$

There are counters in total.



b) 79 counters are put into rows of 7.


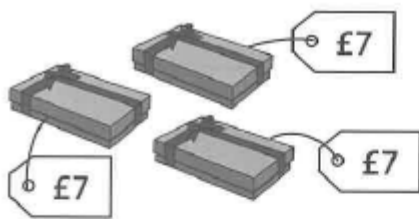
How many complete rows of counters can be formed?

How many counters are left over?

There are complete rows of counters.

There are left over.

5 Alex buys these items.



CHALLENGE

The total cost of the items is £35.

How much does a bag of popcorn cost?

Write down your method.

First ... _____

Then ... _____

Finally ... _____

A bag of popcorn costs £ .

Reflect

Explain how to convince your friend that $5 \times 7 = 35$.

- _____
- _____
- _____
- _____

