


Maths Fluency Week 1 Day 4

Starters

a) Liam has two different sizes of rectangle.

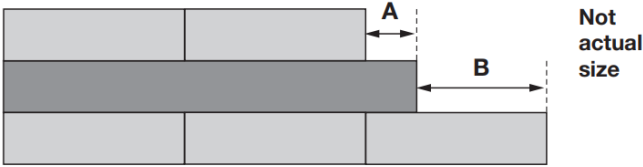


Calculate the lengths of **A** and **B**.

 **A** =  cm

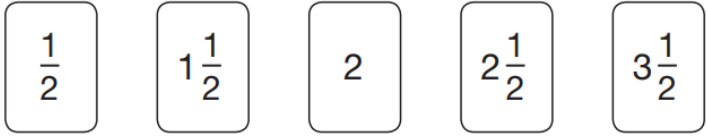
**B** =  cm

He makes this pattern with them.




b)

Here are five number cards.



Use **three** of the number cards to make this calculation correct.

  $( \quad + \quad ) \times \quad = 10$

Day 4 Arithmetic

1.  $81 \times 2 =$

2.  $33 + 8 \times 2 =$

3.  $43 \times 32 =$

4.  $654.85 - 84.89 =$

5.  $0.49 \div 0.07 =$

6.  $54 \times \quad = 0 \text{ (M)}$