

1a. How many squares cover the surface of the shape below?

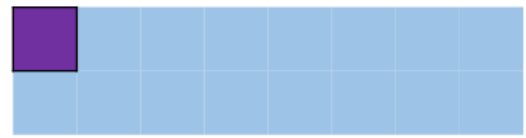


The surface of the shape is covered by \_\_\_ squares.



VF

1b. How many squares cover the surface of the shape below?

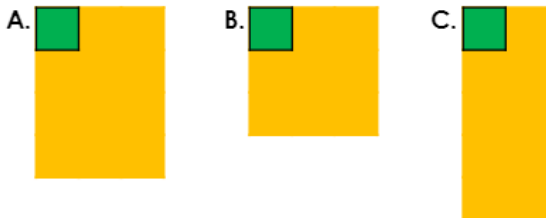


The surface of the shape is covered by \_\_\_ squares.



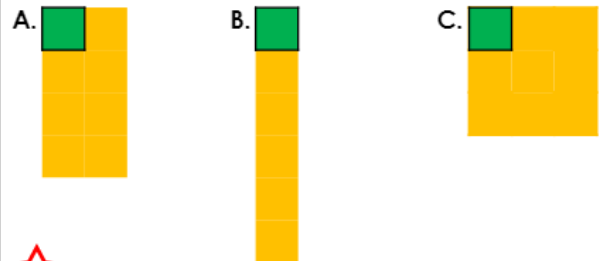
VF

2a. Order the shapes from smallest area to largest area using the square as a reference.



VF

2b. Order the shapes from largest area to smallest area using the square as a reference.



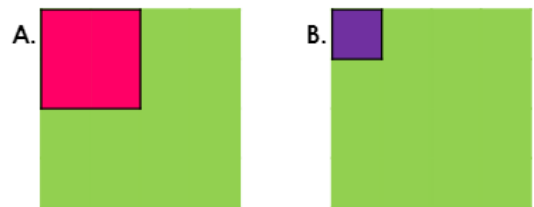
VF

3a. Estimate how many of each square would cover the shapes below.



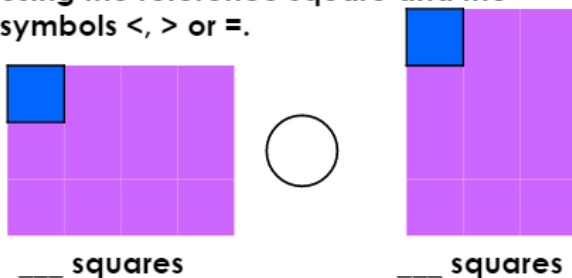
VF

3b. Estimate how many of each square would cover the shapes below.



VF

4a. Compare the area of these shapes using the reference square and the symbols  $<$ ,  $>$  or  $=$ .



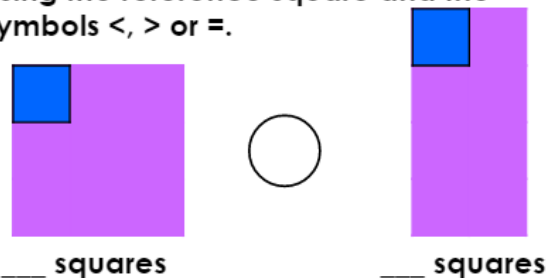
\_\_\_ squares

\_\_\_ squares



VF

4b. Compare the area of these shapes using the reference square and the symbols  $<$ ,  $>$  or  $=$ .



\_\_\_ squares


\_\_\_ squares



VF

5a. How many squares cover the surface of the shape below?

reference square



The surface of the shape is covered by \_\_\_ squares.



VF

5b. How many squares cover the surface of the shape below?

reference square



The surface of the shape is covered by \_\_\_ squares.




VF

6a. Order the shapes from smallest area to largest area using the square as a reference.

A.



B.



C.



reference square



VF

6b. Order the shapes from largest area to smallest area using the square as a reference.

A.



B.



C.




reference square



VF

7a. Estimate how many of each square would cover the shape below.



A.

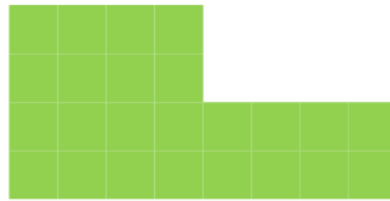


B.



VF

7b. Estimate how many of each square would cover the shape below.



A.



B.



VF

8a. Compare the area of these shapes using the reference square and the symbols  $<$ ,  $>$  or  $=$ .



\_\_\_ squares

\_\_\_ squares

reference square



VF

8b. Compare the area of these shapes using the reference square and the symbols  $<$ ,  $>$  or  $=$ .



\_\_\_ squares

\_\_\_ squares

reference square



VF

## Answers

### Developing

1a. 15

2a. B, C, A

3a. A. 3 squares; B. 12 squares

4a. =

### Expected

5a. 9

6a. A, C, B

7a. A. 4 squares; B. 16 squares

8a. <

### Developing

1b. 16

2b. C, A, B

3b. A. 4 squares; B. 16 squares

4b. >

### Expected

5b. 7

6b. B, A, C

7b. A. 6 squares; B. 24 squares

8b. >

---

